

Nom _____ Data _____




• **Divideix.**

$52 \overline{) 4}$	$72 \overline{) 6}$	$28 \overline{) 2}$	$88 \overline{) 8}$
$50 \overline{) 5}$	$84 \overline{) 7}$	$39 \overline{) 3}$	$75 \overline{) 5}$
$68 \overline{) 4}$	$96 \overline{) 8}$	$78 \overline{) 6}$	$91 \overline{) 7}$

• **Divideix. Després, encercla les divisions que siguen exactes.**

$86 \overline{) 7}$	$49 \overline{) 3}$	$38 \overline{) 2}$	$47 \overline{) 4}$
$63 \overline{) 4}$	$56 \overline{) 3}$	$84 \overline{) 7}$	$96 \overline{) 2}$

• **Col·loca i divideix.**

$30 : 6$	$29 : 2$	$94 : 3$
		

Nom _____ Data _____

• **Divideix.**

$30 : 5 =$ _____	$18 : 2 =$ _____	$54 : 6 =$ _____	$24 : 3 =$ _____
$63 : 9 =$ _____	$72 : 8 =$ _____	$42 : 7 =$ _____	$48 : 6 =$ _____
$28 : 7 =$ _____	$12 : 2 =$ _____	$20 : 4 =$ _____	$27 : 3 =$ _____

• **Divideix.**

$125 \overline{) 2}$	$522 \overline{) 6}$	$396 \overline{) 9}$	$642 \overline{) 7}$
_____	_____	_____	_____
$472 \overline{) 6}$	$448 \overline{) 8}$	$720 \overline{) 4}$	$881 \overline{) 9}$
_____	_____	_____	_____

• **Col·loca i divideix.**

Dividend: 403 Divisor: 5

Dividend: 376 Divisor: 4

Dividend: 814 Divisor: 7

Dividend: 504 Divisor: 8
