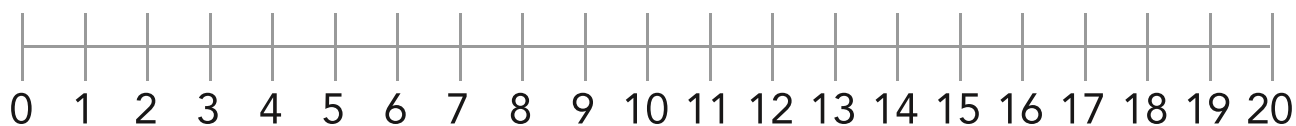


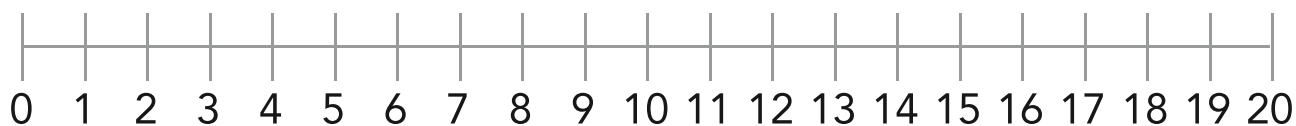
Nom: Data:

1 Completa i pinta.

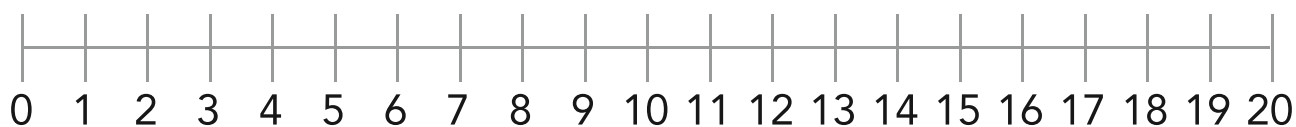
$9 + 2 =$



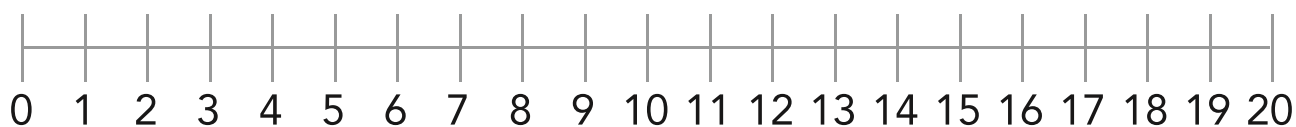
$5 + 5 =$



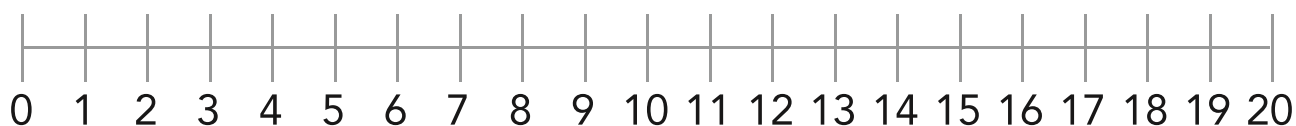
$7 + 9 =$



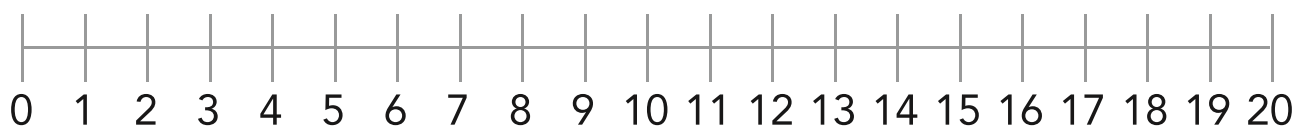
$4 + 8 =$



$5 + 6 =$



$6 + 7 =$



Nom: Data:

1 Completa segons correspongui.

9

$$\square - 1$$

$$6 + \square$$

$$9 - \square$$

$$\square + 2$$

8

$$9 - \square$$

$$\square + 5$$

$$\square - 1$$

7

$$\square - 2$$

$$\square + 4$$

$$10 - \square$$

$$\square + \square$$

6

$$8 - \square$$

$$5 + \square$$

$$\square + \square$$